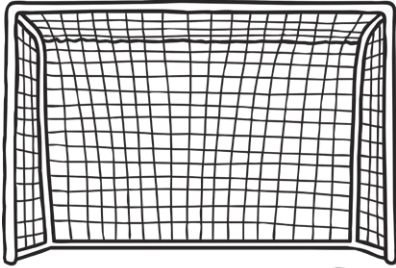





# Sports Day


I can solve multiplication and division problems.



1 goal = 2 points



1 ball in the basket = 5 points



Egg and spoon  
race 1 lap = ?



Race 1 lap = 10  
points



Each bag in hoop  
= 3 points



# Sports Day

Annie played basketball. She scored 15 points.

How many times did she get the ball in the basket?

Lee scored 12 points. He did 2 laps of the egg and spoon race.

How many points is 1 lap of the egg and spoon race?

Brian ran 3 laps. How many points did he get?

Can you show this on a number line?



Zach played football and scored 12 points.

How many goals did he score?

Reyna scored 10 points. What might she have played?

Find all possibilities.



# Answers

Annie played basketball, she scored 15 points.

How many times did she get the ball in the basket?

**3**

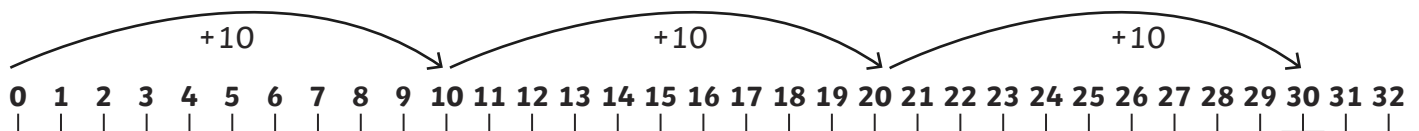
Lee scored 12 points. He did 2 laps of the egg and spoon race.

How many points is 1 lap of the egg and spoon race?

**6**

Brian ran 3 laps. How many points did he get?

Can you show this on a number line?



Zach played football and scored 12 points.

How many goals did he score?

**6**

Reyna scored 10 points. What might she have played?

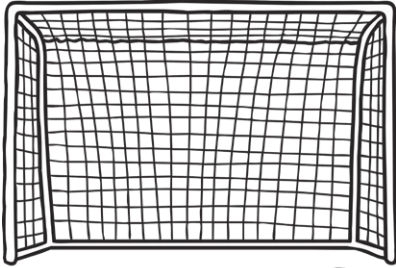
Find all possibilities.

*football, basketball or race*




# Sports Day


I can solve multiplication and division problems.



1 goal = 2 points



1 ball in the basket = 5 points



Egg and spoon  
race 1 lap = ?



Race 1 lap = 10  
points



Hurdles = 6 points  
per hurdle



Each bag in hoop  
= 3 points





# Sports Day

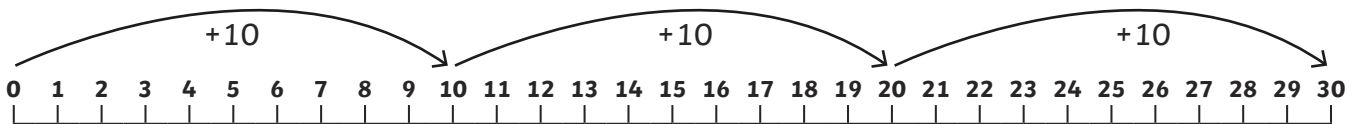
Hari was jumping hurdles and jumped over 2 hurdles.

How many points did he get?

Annie played basketball. She scored 25 points.

How many times did she get the ball in the basket?

Brian recorded his score like this:



What was his score and how many successful goes did he have?

Zach played football and scored 18 points. How many goals did he score?

Lee scored 14 points. He did 2 laps of the egg and spoon race. How many points do you score for 1 lap of the egg and spoon race?

Reyna scored 20 points. What might she have played?

Find all possibilities.

Amena works out her score like this:



What sport did she play and how many successful goes did she have?



# Answers

Hari was jumping hurdles and jumped over 2 hurdles.

How many points did he get?

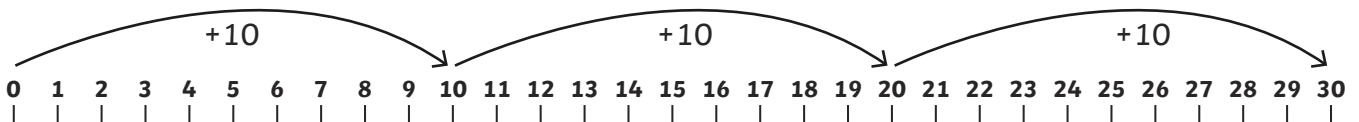
**12**

Annie played basketball, she scored 25 points.

How many times did she get the ball in the basket?

**5**

Brian recorded his score like this:



What was his score and how many successful goes did he have?

**He scored 30 and he ran 3 laps.**

Zach played football and scored 18 points. How many goals did he score?

**9**

Lee scored 14 points. He did 2 laps of the egg and spoon race. How many points do you score for 1 lap of the egg and spoon race?

**7**

Reyna scored 20 points. What might she have played?

Find all possibilities.

**football, basketball or race**

Amena works out her score like this:



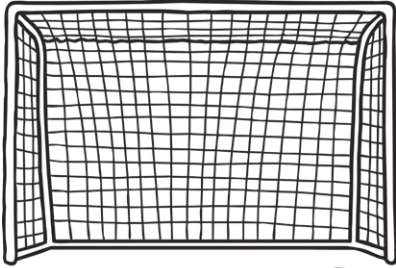
What sport did she play and how many successful goes did she have?

**She threw 4 beanbags into the hoop**




# Sports Day


I can solve multiplication and division problems.



1 goal = ?



1 ball in the basket = 5 points



Egg and spoon  
race 1 lap = ?



Race 1 lap = 10  
points



Hurdles = 6 points  
per hurdle



Each bag in hoop  
= 3 points




# Sports Day

Hari was jumping hurdles and scored 12 points.

How many hurdles did he manage to jump over?

Annie recorded her score like this:



What might she have played?

Find all possibilities.

Brian was running laps. He scored 80 points. How many laps did he run?

Zach played football and scored 18 points. He scored 9 nine goals.

How many points was each goal?

Lee scored 16 points. He did two laps of the egg and spoon race.

How many points is 1 lap of the egg and spoon race?

Reyna scored 24 points. What might she have played?

Find all possibilities.






# Answers

Hari was jumping hurdles and scored 12 points.

How many hurdles did he manage to jump over?

2

Annie recorded her score like this:



What might she have played?

Find all possibilities.

*basketball (3 balls in the hoop)  
or bean bags (5 goes)*

Brian was running laps. He scored 80 points. How many laps did he run?

8

Zach played football and scored 18 points. He scored 9 nine goals.

How many points was each goal?

2

Lee scored 16 points. He did two laps of the egg and spoon race.

How many points is 1 lap of the egg and spoon race?

8

Reyna scored 24 points. What might she have played?

Find all possibilities.

*football, hurdles, beanbags or egg and spoon race*