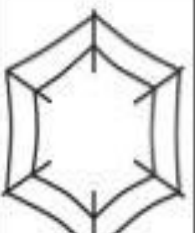
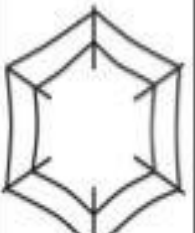
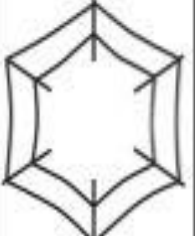









Print the missing numbers.

Name





Name: _____

1-20

Number Sequence Maze

Follow the correct number sequence to help the monkey find a tree.

16	15	14	13		
17	7	11	12		
18	19	10	9	8	1
2	20	4	9	7	2
	14	10	6	3	
	5	11	5	4	

Number Ordering

Write each set of numbers in the correct order.

2 6 12 9 5

2 8 7 1 10

0 4 9 8 5

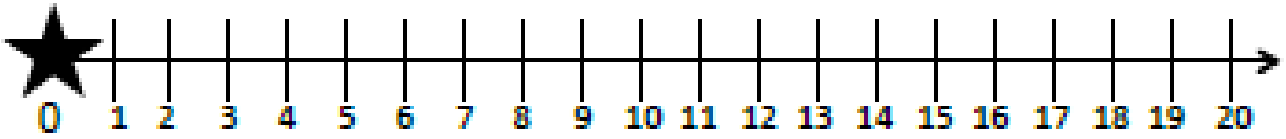
6 15 4 13 20

	Tens frame	How many?
1)		
2)		
3)		
4)		
5)		
6)		
7)		
8)		

Ladybugs

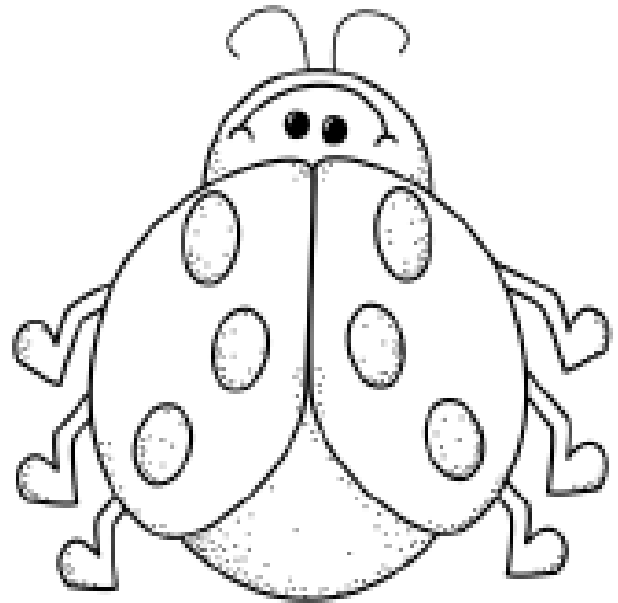
Name _____

COUNT NUMBERS TO 20



How many?

15 ladybugs arranged in 3 rows of 5.



20 ladybugs arranged in 4 rows of 5.

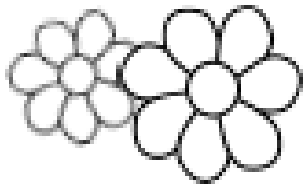
11 ladybugs arranged in 3 rows (5, 5, 1).

15 ladybugs arranged in 3 rows of 5.

19 ladybugs arranged in 4 rows (5, 5, 5, 4).










15 ladybugs arranged in 3 rows of 5.

Name _____



How Many Flowers?

Count the pictures and write the number.

 <input data-bbox="236 696 405 878" type="text"/>	 <input data-bbox="715 696 884 878" type="text"/>	 <input data-bbox="1225 696 1394 878" type="text"/>
 <input data-bbox="245 1290 414 1471" type="text"/>	 <input data-bbox="724 1290 893 1471" type="text"/>	 <input data-bbox="1235 1290 1404 1471" type="text"/>
 <input data-bbox="245 1883 414 2065" type="text"/>	 <input data-bbox="724 1883 893 2065" type="text"/>	 <input data-bbox="1235 1883 1404 2065" type="text"/>