

Missing Numbers

Cut and paste the numbers in their correct spaces.

| | | | | | |
|---|---|--|---|--|---|
| 4 | 5 | | 7 | | 9 |
|---|---|--|---|--|---|

| | | | | | |
|----|--|----|--|----|----|
| 30 | | 32 | | 34 | 35 |
|----|--|----|--|----|----|

| | | | | | |
|--|----|----|----|--|----|
| | 13 | 14 | 15 | | 17 |
|--|----|----|----|--|----|












| | | | | | |
|----|--|----|----|----|--|
| 55 | | 57 | 58 | 59 | |
|----|--|----|----|----|--|

| | | | | | |
|----|----|--|--|----|----|
| 18 | 19 | | | 22 | 23 |
|----|----|--|--|----|----|

| | | | | |
|----|----|----|----|----|
| 12 | 31 | 56 | 6 | 20 |
| 33 | 21 | 8 | 16 | 60 |





Missing Numbers

What number comes before? What number comes after?




Missing Numbers

What are the missing numbers on the balloons? Write them down.















Missing Numbers

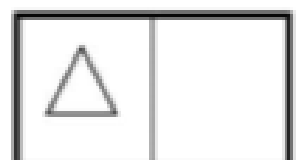
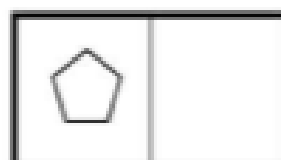
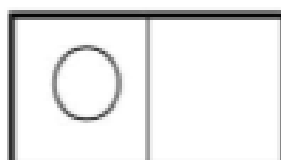





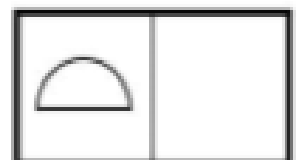
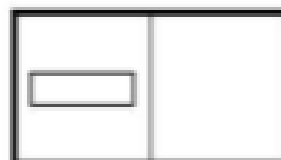

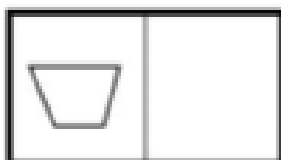
What number comes before? What number comes after?



Missing Numbers — Count in twos

What are the missing numbers in the grid?
Write the numbers that correspond to the shapes.

| | | | | | | |
|---|---|---|--|--|---|---|
| 0 | 2 | 4 |  | 8 |  | 12 |
|  | 16 |  | 20 | 22 | 24 |  |
| 28 |  | 32 | 34 |  | 38 | 40 |
| 42 |  | 46 |  | 50 | 52 |  |
| 56 | 58 |  | 62 | 64 |  | 68 |



Missing Numbers

Cut and paste the numbers in their correct spaces.

| | | | | |
|---|---|---|--|----|
| 4 | 6 | 8 | | 12 |
|---|---|---|--|----|

| | | | | |
|----|--|----|----|----|
| 30 | | 34 | 36 | 38 |
|----|--|----|----|----|

| | | | | |
|--|----|----|----|----|
| | 19 | 21 | 23 | 25 |
|--|----|----|----|----|

| | | | | |
|----|--|----|----|----|
| 10 | | 14 | 16 | 18 |
|----|--|----|----|----|

| | | | | |
|----|----|--|----|----|
| 45 | 47 | | 51 | 53 |
|----|----|--|----|----|

| | | | | |
|----|----|----|----|----|
| 17 | 12 | 32 | 49 | 10 |
|----|----|----|----|----|

Number Ordering

Write each set of numbers in the correct order.

| | | | | |
|----|----|----|---|----|
| 25 | 10 | 20 | 5 | 15 |
| | | | | |

| | | | | |
|----|----|----|----|----|
| 30 | 50 | 40 | 70 | 60 |
| | | | | |

| | | | | |
|----|----|----|----|----|
| 28 | 58 | 38 | 68 | 48 |
| | | | | |

Number Ordering

Write each set of numbers in the correct order.

6 9 1 10 5

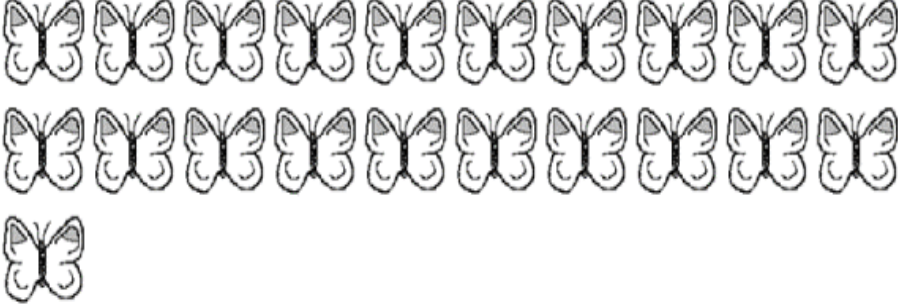

16 69 34 61 43



10 40 23 0 14

35 15 5 25 52

These objects have been put into groups of 10. Help Newton to count them.


1)  How many? 

2)  How many? 

3)  How many? 

4)  How many? 

5)  How many? 

6)  How many? 